

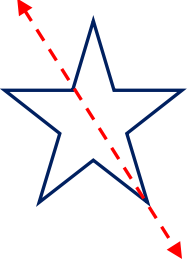


Adı Soyadı :

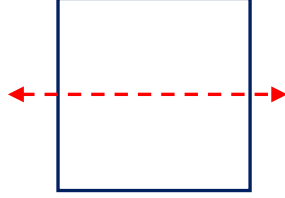
Numarası :

Konu: Uzamsal İlişkiler (Simetri Etkinliği) 3


Aşağıdaki şekillerin verilen doğruya göre simetrik olup olmadığını işaretleyelim.



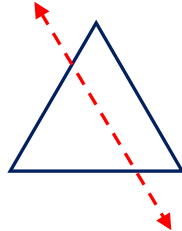
- ☐ simetrik
☐ simetrik değil



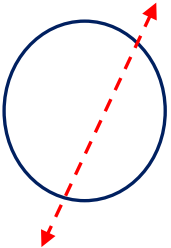
- ☐ simetrik
☐ simetrik değil



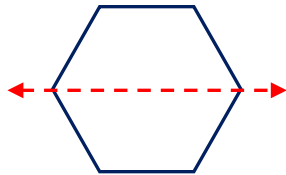
- ☐ simetrik
☐ simetrik değil



- ☐ simetrik
☐ simetrik değil





- ☐ simetrik
☐ simetrik değil

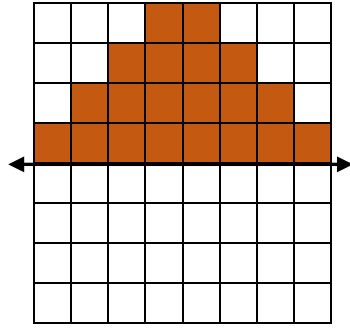
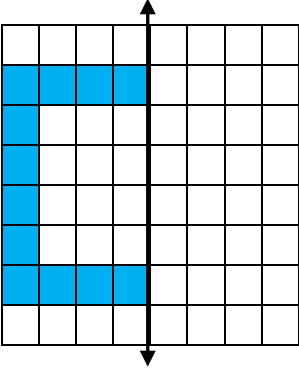


- ☐ simetrik
☐ simetrik değil

Aşağıda verilen görsellere örnekteki gibi birer simetri doğrusu çizelim.



Aşağıda verilen şekilleri simetri doğrusuna göre tamamlayalım.



Aşağıdaki sözcüklerin doğruya göre simetriğini çizin.

